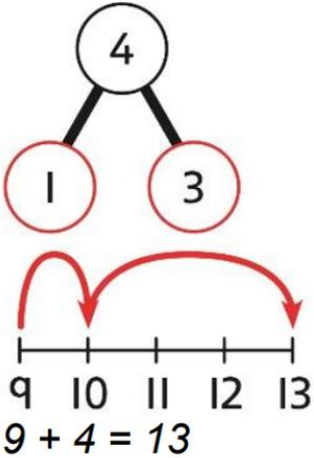


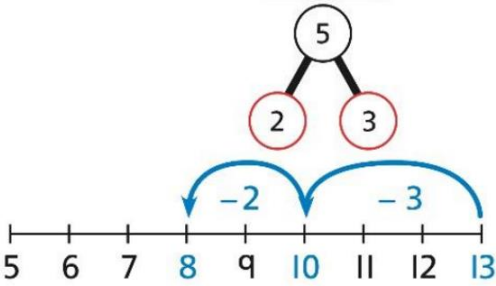


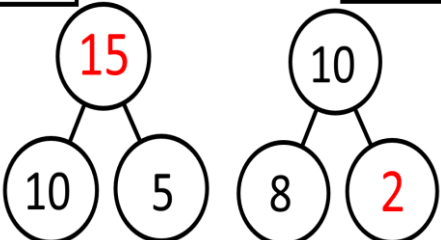






Year 1 - Maths

Arithmetic Methods



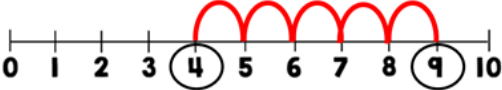








Name	Completed Method	Video Explanation	Practice Questions
Addition	 <p>$9 + 4 = 13$</p>	 <p><u>LINK</u></p>	 <p><u>LINK</u></p>
Subtraction	<p>$13 - 5$</p>  <p>$13 - 5 = 8$</p>	 <p><u>LINK</u></p>	 <p><u>LINK</u></p>
Addition/ Subtraction Involving 10s	<p><input type="text"/> - 10 = 5 10 - 8 = <input type="text"/></p>  <p>$15 = 10 + 5$ $10 = 8 + 2$</p>	 <p><u>LINK</u></p>	 <p><u>LINK</u></p>



Year 1 - Maths

Arithmetic Methods



Name	Completed Method	Video Explanation	Practice Questions
Missing Number Problems	$4 + \square = 9$ 	 LINK	 LINK
Multiplication	$3 \times 4 = 12$ (3 lots of 4) 	 LINK	 LINK
Division	$10 \div 2 = 5$ (10 shared into 2 equal groups) 	 LINK	 LINK