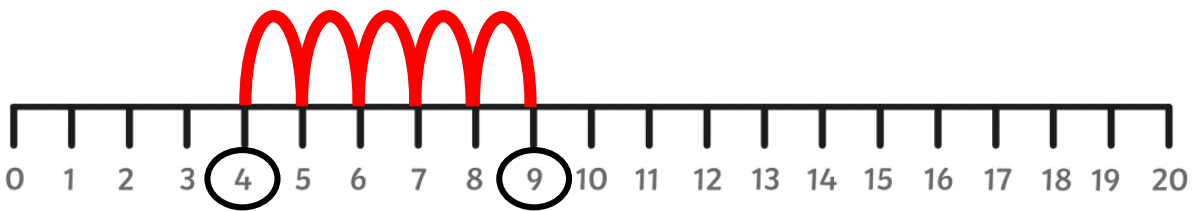




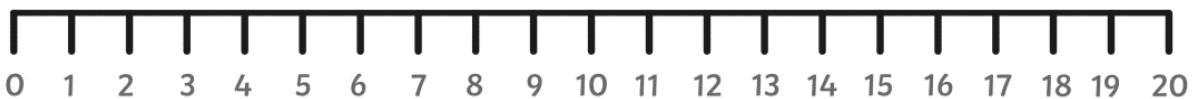
Missing Number Problems:



$$4 + \boxed{} = 9$$



$$6 - \boxed{} = 3$$

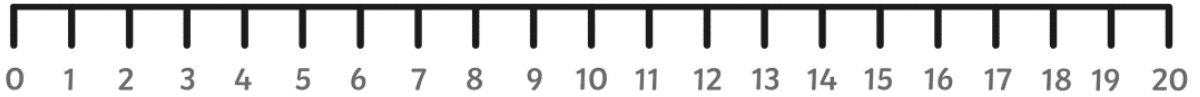




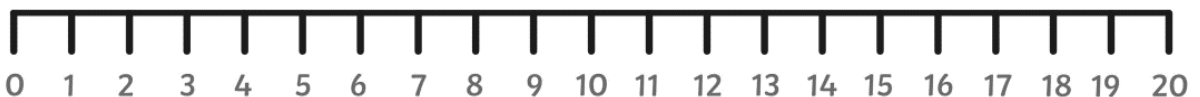
Missing Number Problems:



$$\boxed{} + 5 = 16$$



$$\boxed{} - 4 = 9$$

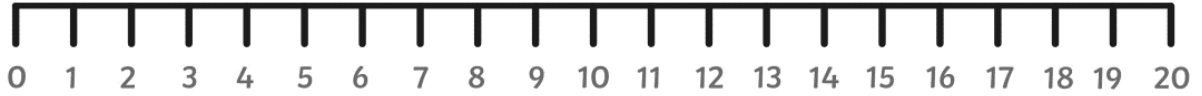




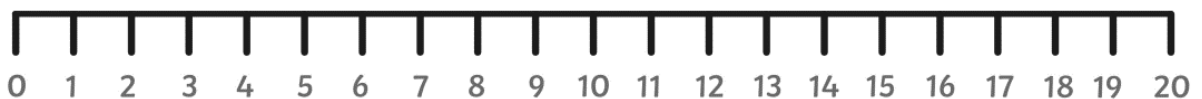
Create Your Own
Missing Number Problems:



$$\boxed{} + \boxed{} = \boxed{}$$



$$\boxed{} - \boxed{} = \boxed{}$$

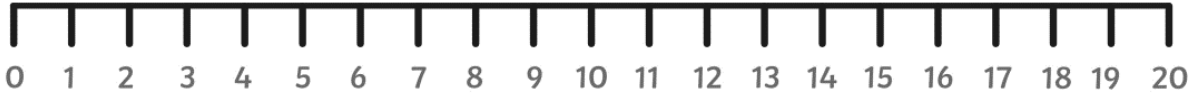




Create Your Own
Missing Number Problems:



$$\boxed{} + \boxed{} = \boxed{}$$



$$\boxed{} - \boxed{} = \boxed{}$$

